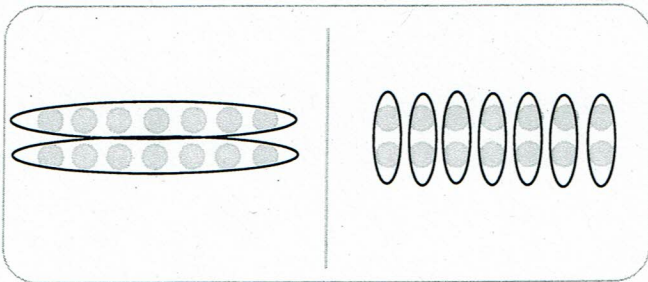


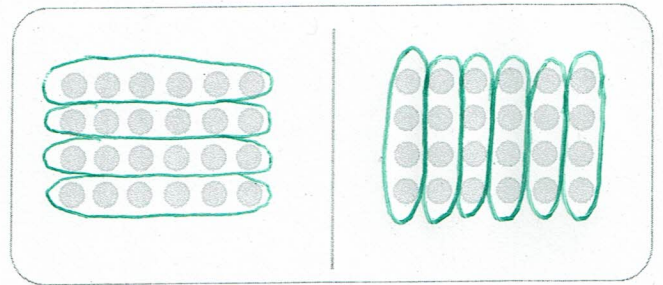
Tauschaufgaben

Aufgabe: Zeichne Kreise um die Mal- sowie Tauschaufgabe.




$2 \cdot 7 = 14$

$7 \cdot 2 = 14$



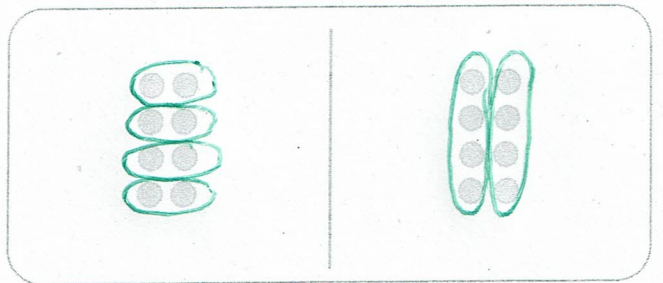
$4 \cdot 6 = 24$

$6 \cdot 4 = 24$




$3 \cdot 4 = 12$

$4 \cdot 3 = 12$



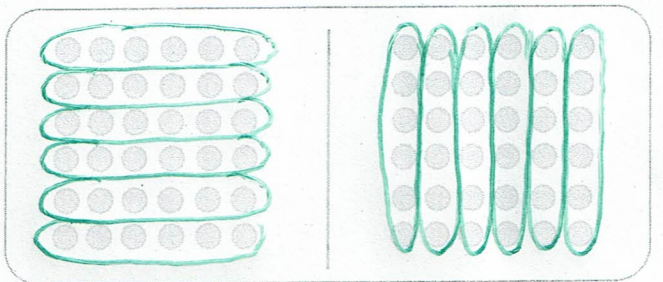
$4 \cdot 2 = 8$

$2 \cdot 4 = 8$



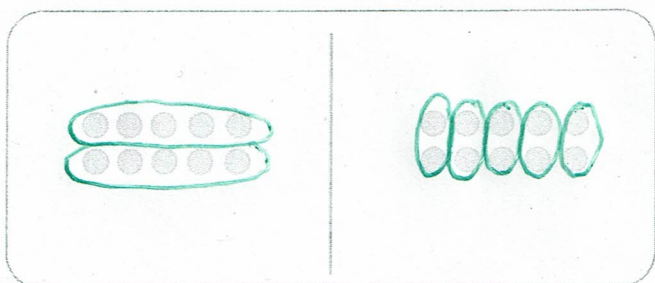
$3 \cdot 5 = 15$

$5 \cdot 3 = 15$



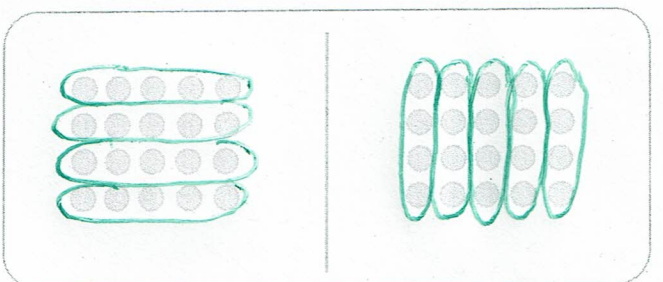
$6 \cdot 6 = 36$

$6 \cdot 6 = 36$



$2 \cdot 5 = 10$

$5 \cdot 2 = 10$



$4 \cdot 5 = 20$

$5 \cdot 4 = 20$